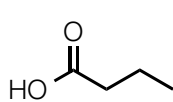
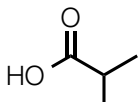
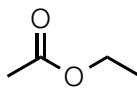
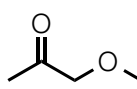
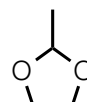


Each ^1H NMR spectrum below corresponds to one of the structural isomers, **A-G**. Match each spectrum to its corresponding compound. Note the different ppm scales.

**A****B****C****D****E****F****G**